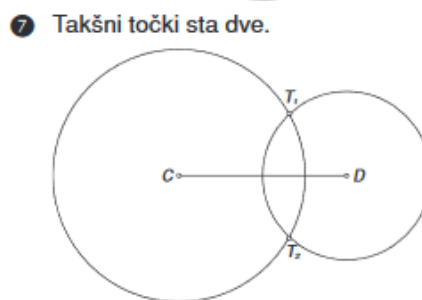
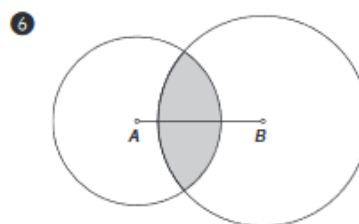
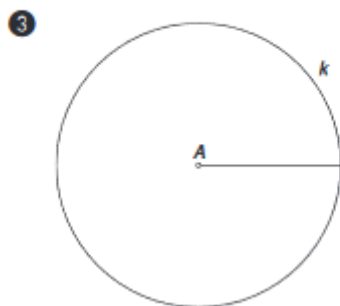
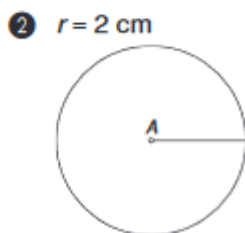
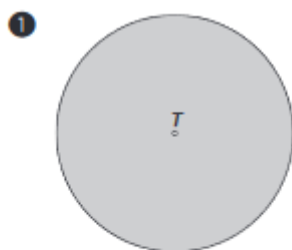


KROŽNICA IN KROG vaje

Učbenik stran 188/ naloga 1,2,3,6,7 in 8

Pri načrtovanju krožnice si najprej izberi točko, ki bo središče tvoje krožnice. V šestilo vzemi polmer, nariši ga in nato nariši krožnico.

Rešitve



- 8 a) T b) TA, TB, TC, TD c) polmer č) BC d) A, B, C, D
 e) v notranjosti kroga f) zunaj kroga