

VAJE V MERJENJU IN NAČRTOVANJU KOTOV 2. del

Dobila sem spletna naslova, ki lepo razložita merjenje in načrtovanje kotov.

Če imaš pri tem težave, priporočam, da si ju pogledaš.

https://www.youtube.com/watch?v=JWWLiY_B1H8 risanje kotov

https://www.youtube.com/watch?v=4jjRxKBD7nY&list=TLPQMjUwMzlwMjArNks_30tjfw&index=2
merjenje kotov

1. naloga

BREZ merjenja zapiši vrsto kota.

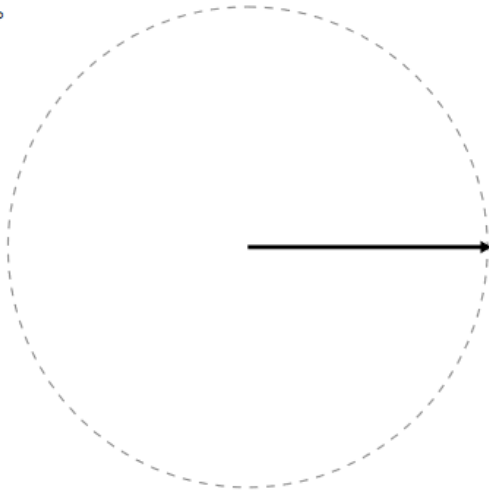
1)	2)	1) ostri kot 2)
----	----	--------------------

3)	4)	5)	3) 4) 5) 6) 7) 8) 9) 10) 11)
6)	7)	8)	
9)	10)	11)	

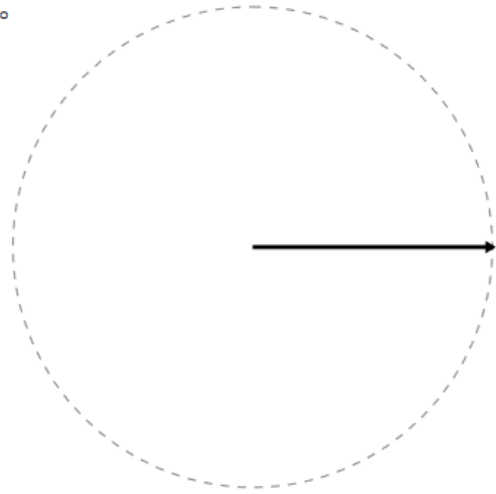
2. naloga

Načrtaj kote.

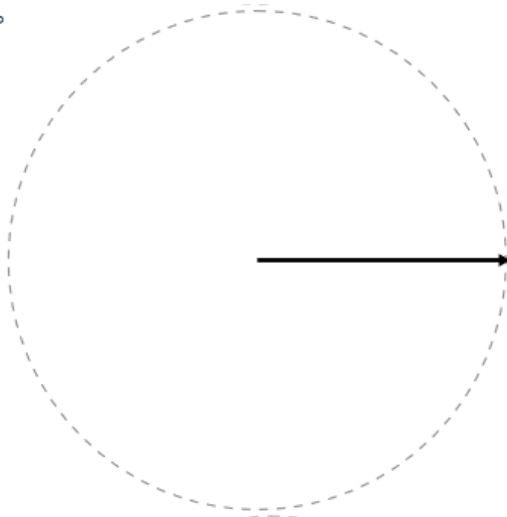
1) 10°



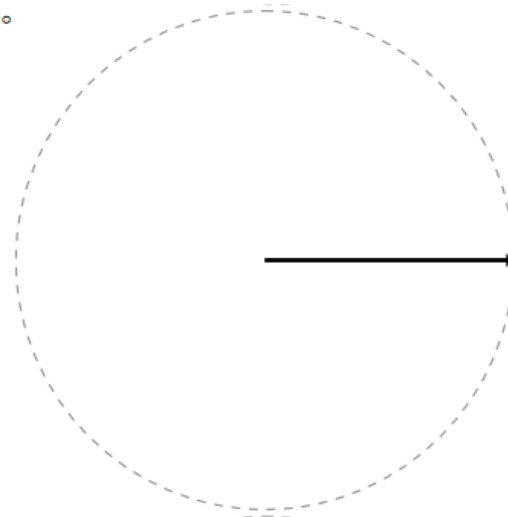
2) 135°



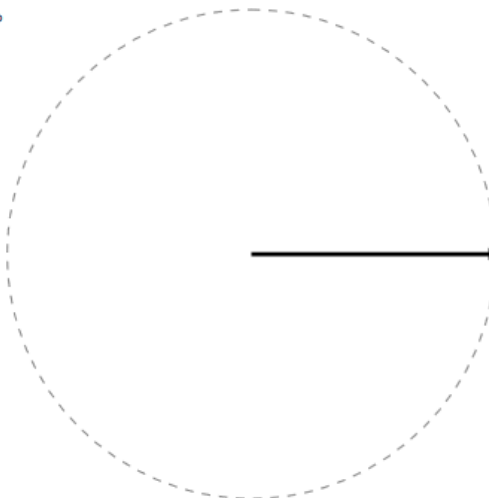
3) 65°



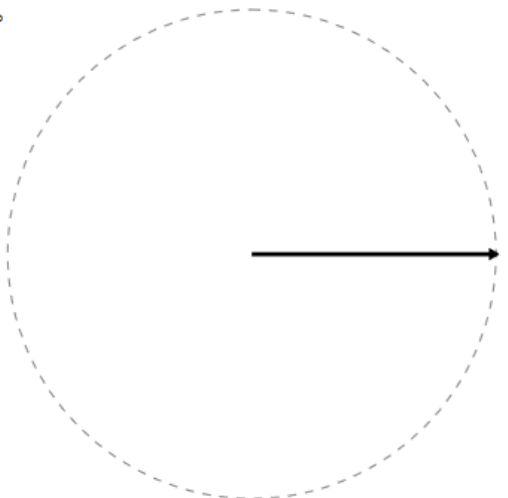
4) 85°



5) 145°



6) 35°



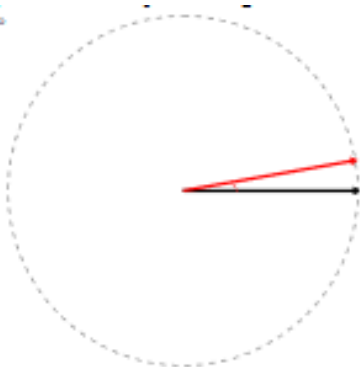
REŠITVE

1. naloga

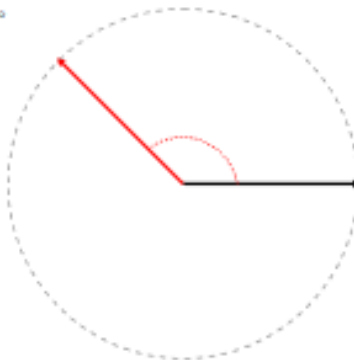
- 1) ostri kot
- 2) iztegnjeni kot
- 3) pravi kot
- 4) ostri kot
- 5) topi kot
- 6) iztegnjeni kot
- 7) ostri kot
- 8) topi kot
- 9) topi kot
- 10) ostri kot
- 11) ostri kot

2. naloga

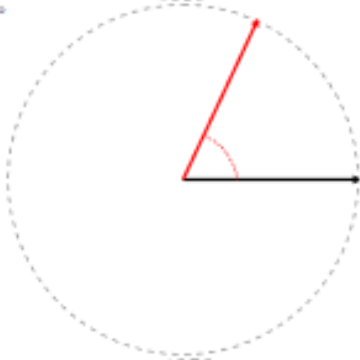
1) 10°



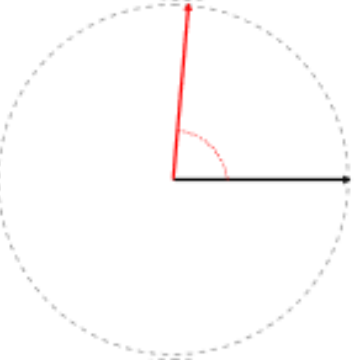
2) 135°



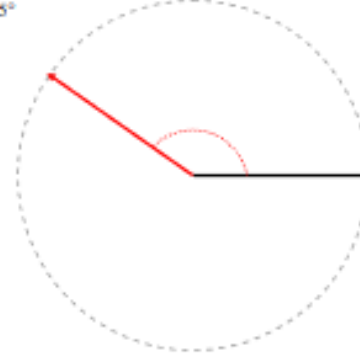
3) 65°



4) 85°



5) 145°



6) 35°

